







| | | | |
|---|--|---|---|
|  | <p>Your Name:</p> <p>You ride your tricycle 3 meters every 2 seconds and pass rider B ten seconds after the race begins. The race is 25 meters long.</p> <p>Who is going to win the race? A</p> |  | <p>Your Name:</p> <p>You get the same head start as Elizabeth and ride 1 meter every 2 seconds.</p> <p>Who is going to win the race? B</p> |
|  | <p>Your Name:</p> <p>You ride half as fast as Leslie but get a 4-meter head start.</p> <p>Who is going to win the race? C</p> |  | <p>Your Name:</p> <p>You get a 1-meter head start and catch up to Elizabeth in 4 seconds.</p> <p>Who is going to win the race? D</p> |
|  | <p>Elizabeth</p> <p>Elizabeth is 11 meters into the race after 4 seconds but is only 13 meters in after 12 seconds (her tricycle is slow because she has a flat tire).</p> <p>Who is going to win the race?</p> |  | <p>Leslie</p> <p>Leslie rides 2 meters per second and starts 2 seconds after the start of the race.</p> <p>Who is going to win the race?</p> |