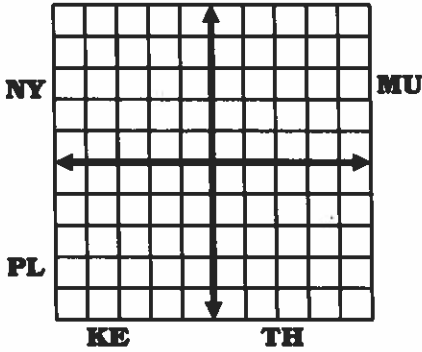




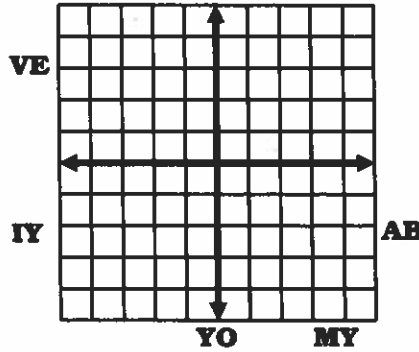
# Why Did the Pirate Have a Paper Towel Hat?

Graph each equation and cross out a two letter combo for the bottom.

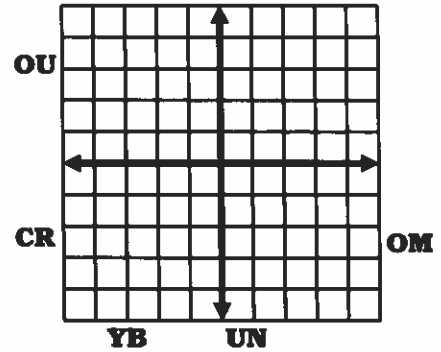
①  $y = -4x + 3$



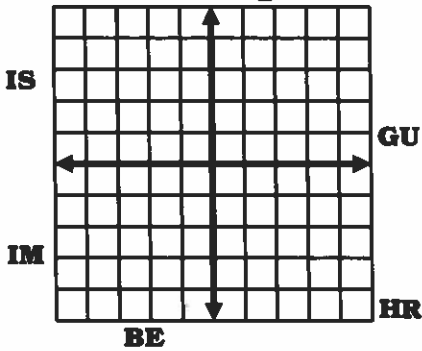
②  $y = 6x - 5$



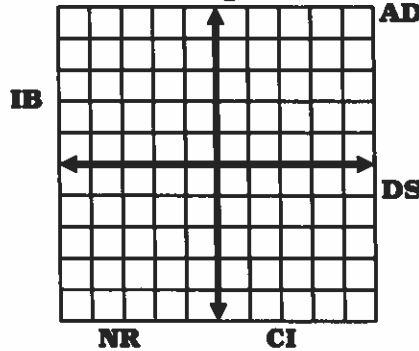
③  $y = -x - 2$



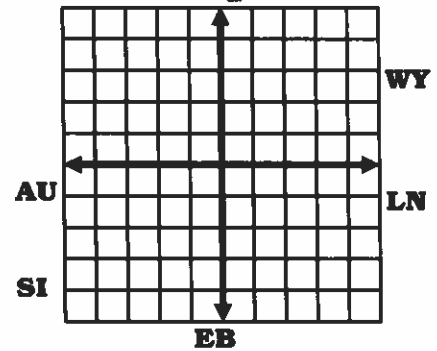
④  $y = -\frac{1}{2}x$



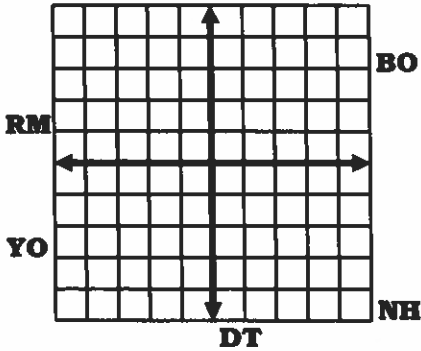
⑤  $y = \frac{2}{3}x + 1$



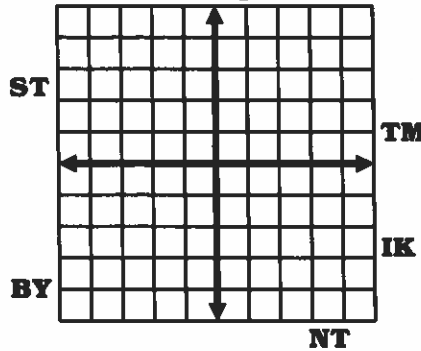
⑥  $y = \frac{7}{2}x - 4$



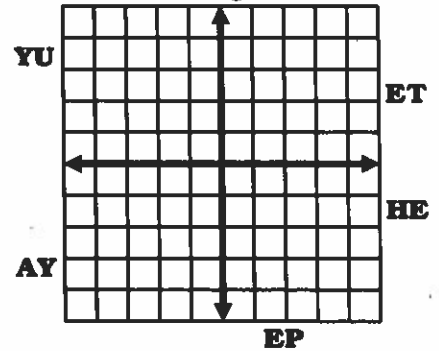
⑦  $y = -\frac{5}{4}x + 2$



⑧  $y = -\frac{8}{3}x + 4$



⑨  $y = \frac{2}{5}x - 4$



1	6	3	8	2	7	4	9	5